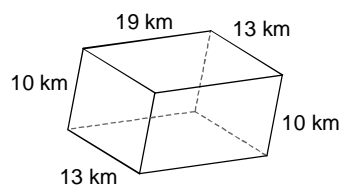


Lesson #2 - Rectangular and Triangular Prisms

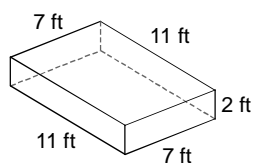
Date _____

Draw the net, then find the surface area and volume of each figure.

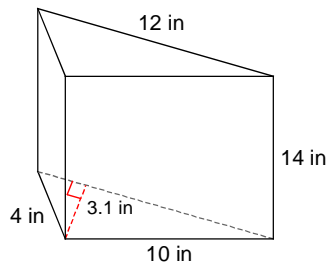
1)



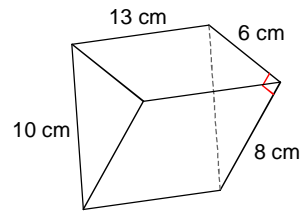
2)



3)



4)

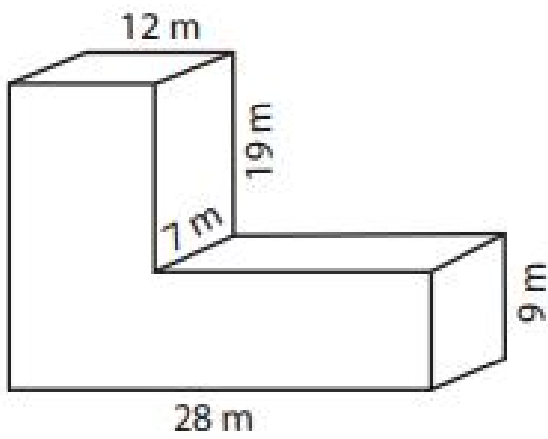


Use the appropriate formula to solve for the missing measurement.

- 5) A rectangular prism has a volume of 5940cm^2 with a height of 15cm and a length of 33cm . What is the width of the box?

Find the surface area and the volume of the L-Block.

6.



7.

