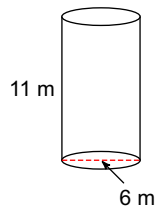


Lesson #3. Cylinders and Cones

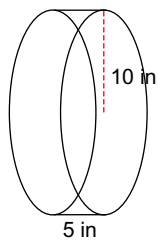
Date _____

Draw the net, then calculate the surface area and volume of each figure. Round to the nearest tenth.

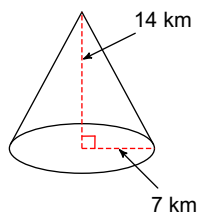
1)



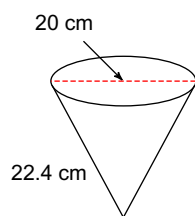
2)



3)



4)



5) A Cylinder has a volume of 2769.48cm^3 with a height of 18cm . What is the length of the radius?