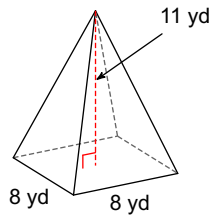


## Lesson #4 Square Pyramids and Spheres

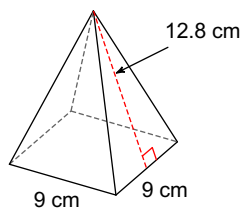
Date \_\_\_\_\_

**Draw the net, then calculate the surface area and the volume. Round to the nearest tenth.**

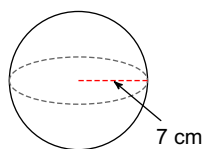
1)



2)



3)



4)

