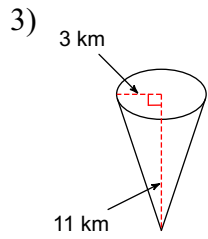
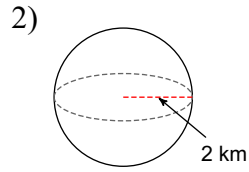
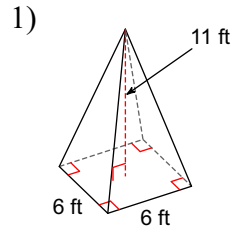
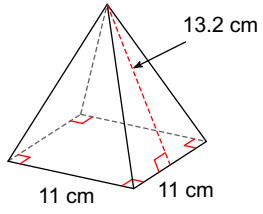


Homework 4.3 - Cones, Pyramids, and Spheres

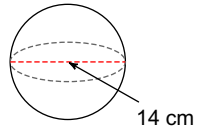
Find the surface area and volume of each figure.



4)



5)



6)

